

kl. 1c

imię i nazwisko

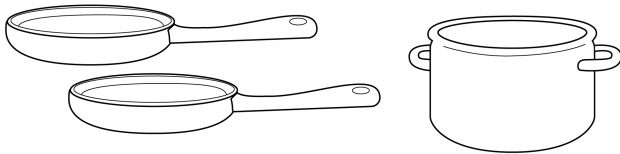
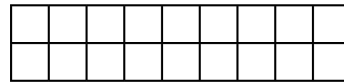

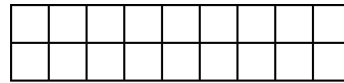



klasa

Zadanie 1.

Zapisz działania według wzoru i je oblicz.



$$2 + 3 = 5$$



Zadanie 2.


Uzupełnij rysunki i działania zgodnie ze wzorem.



$$5 = 3 + 2$$

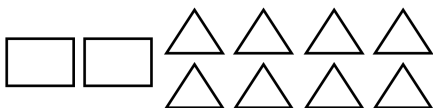


$$5 = 2 + 3$$



$$7 = 1 + 6$$

$$7 = \begin{array}{|c|c|} \hline & \\ \hline & \\ \hline \end{array} + \begin{array}{|c|c|} \hline & \\ \hline & \\ \hline \end{array}$$



$$10 = \begin{array}{|c|c|} \hline & \\ \hline & \\ \hline \end{array} + \begin{array}{|c|c|} \hline & \\ \hline & \\ \hline \end{array}$$

$$10 = \begin{array}{|c|c|} \hline & \\ \hline & \\ \hline \end{array} + \begin{array}{|c|c|} \hline & \\ \hline & \\ \hline \end{array}$$

$$9 = 4 + 5$$

$$9 = \begin{array}{|c|c|} \hline & \\ \hline & \\ \hline \end{array} + \begin{array}{|c|c|} \hline & \\ \hline & \\ \hline \end{array}$$

